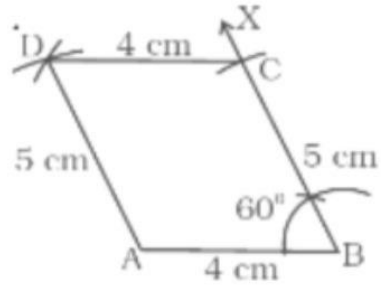


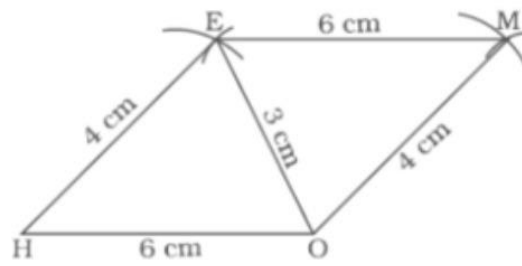
## CLASS TEST Ch -4

1. Construct a parallelogram ABCD in which  $AB = 4$  cm,  $BC = 5$  cm and  $\angle B = 60^\circ$ .
2. Construct a parallelogram HOME with  $HO = 6$  cm,  $HE = 4$  cm and  $OE = 3$  cm.
3. Construct a rhombus LEND where  $LN = 5.6$  cm and  $DE = 6.5$  cm.
4. Construct a rectangle MIST where  $MI = 7$  cm,  $IS = 5$  cm.
5. Construct a trapezium PQRS in which  $PQ \parallel SR$ ,  $\angle P = 105^\circ$ ,  $PS = 3$  cm,  $PQ = 4$  cm,  $RQ = 4.5$  cm and  $RS = 8$  cm.
6. Construct Quadrilateral GOLD.  $OL = 7.5$  cm,  $GL = 6$  cm,  $GD = 6$  cm,  $LD = 5$  cm,  $OD = 10$  cm

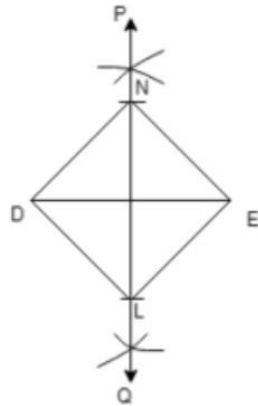
1



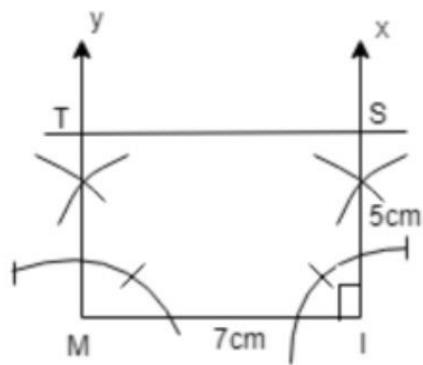
2



3



4



^†

www.ck12.org